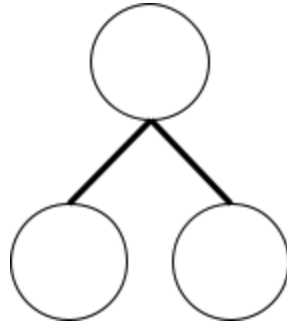



# Gr1 Mod1 Topic H Quiz (L28-32)

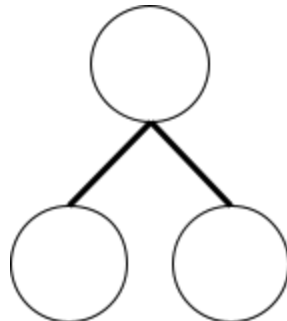

1. There were 9 kids building a snowman in the park. Three kids went home. How many kids were still in the park building a snowman?



$$\underline{\quad} - \underline{\quad} = \underline{\quad}$$

         kids were still in the park building a snowman.

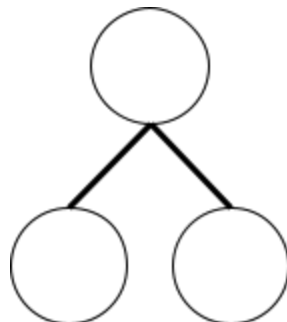

2. There are 10 penguins on the iceberg. Six are asleep. How many are not asleep?



$$\underline{\quad} - \underline{\quad} = \underline{\quad}$$

         penguins are not asleep.

3. Toby collects snowballs. On Monday, he finds 6 snowballs. On Tuesday, he finds some more. Toby finds a total of 15 snowballs. How many snowballs does Toby find on Tuesday?

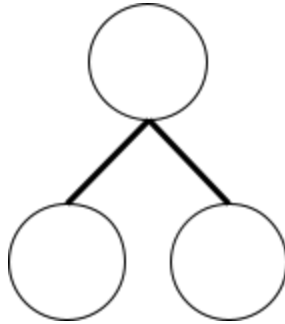



$$\underline{\quad} + \underline{\quad} = \underline{\quad}$$

$$\underline{\quad} - \underline{\quad} = \underline{\quad}$$

Toby finds          snowballs on Tuesday.

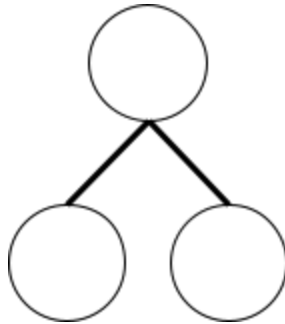

4. Deb has 18 winter hats. Some hats have polka dots. Ten hats have stripes. How many hats have polka dots?



$$\underline{\quad\quad} - \underline{\quad\quad} = \underline{\quad\quad}$$

         hats have polka dots.

5. Glenn has 9 penguins. Five are black. The rest are white. How many pens are white?



$$\underline{\quad\quad} + \underline{\quad\quad} = \underline{\quad\quad}$$

$$\underline{\quad\quad} - \underline{\quad\quad} = \underline{\quad\quad}$$

         pens are white.